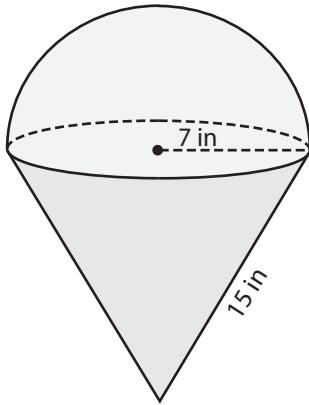


Name : _____

Surface Area of Composite Figures

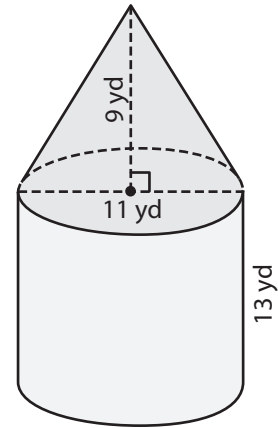
Find the surface area of each figure. Round your answer to two decimal places.
(use $\pi = 3.14$)

1)



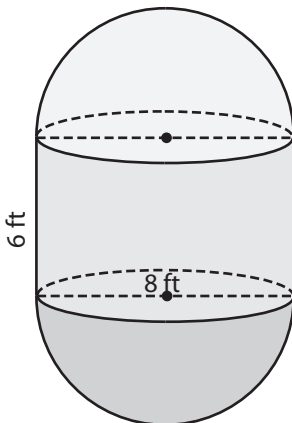
Surface Area = _____

2)



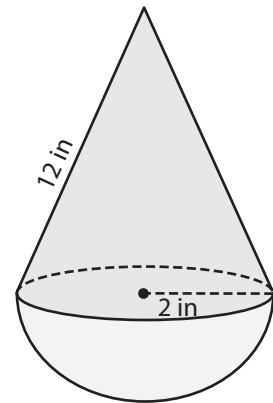
Surface Area = _____

3)



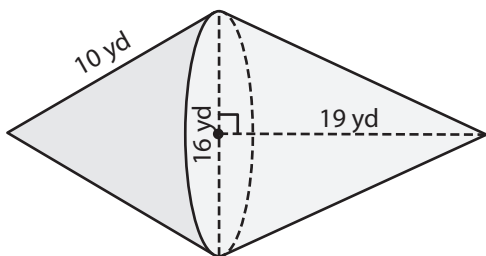
Surface Area = _____

4)



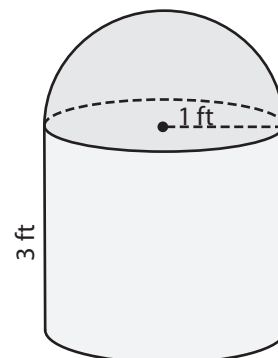
Surface Area = _____

5)



Surface Area = _____

6)



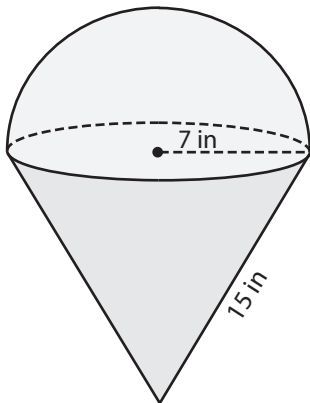
Surface Area = _____

Name : _____

Surface Area of Composite Figures

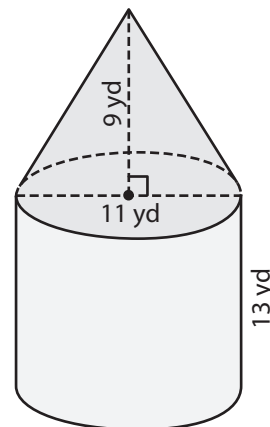
Find the surface area of each figure. Round your answer to two decimal places.
(use $\pi = 3.14$)

1)



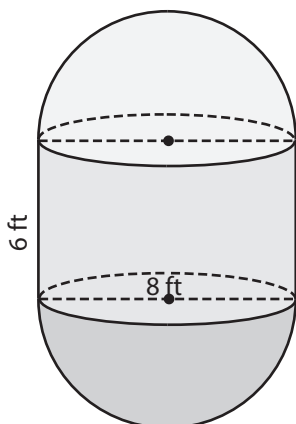
Surface Area = 637.42 in²

2)



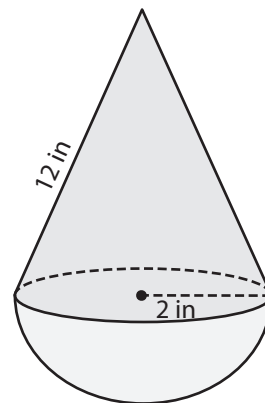
Surface Area = 726.16 yd²

3)



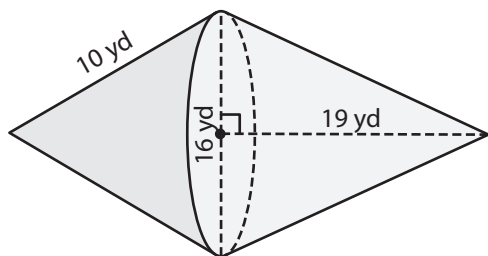
Surface Area = 351.68 ft²

4)



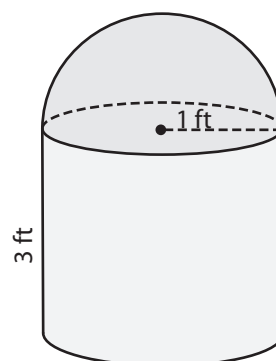
Surface Area = 100.48 in²

5)



Surface Area = 769.06 yd²

6)



Surface Area = 28.26 ft²